

312/1

— **GEOGRAPHY** —

Paper 1



Apr. 2021 – 2¾ hours

Name Index Number

Candidate's Signature Date

Instructions to candidates

- (a) Write your name and index number in the spaces provided above.
- (b) Sign and write the date of the examination in the spaces provided above.
- (c) This paper consists of two sections; **A** and **B**.
- (d) Answer **all** the questions in section **A**.
- (e) Answer **question 6** and any other **two** questions from section **B**.
- (f) Answers **must** be written in the spaces provided at the end of question 10.
- (g) **This paper consists of 20 printed pages.**
- (h) **Candidates should check the question paper to ascertain that all the pages are printed as indicated and that no questions are missing.**
- (i) **Candidates should answer the questions in English.**

For Examiner's Use Only

Section	Questions	Maximum Score	Candidate's Score
A	1–5	25	
B	6	25	
		25	
		25	
Total Score			



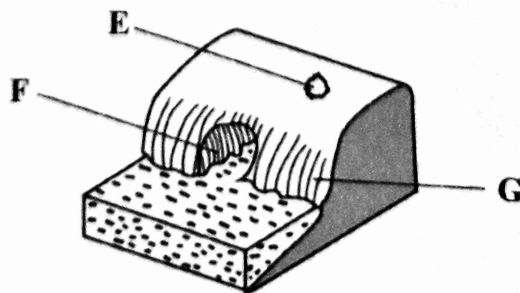
SECTION A

Answer **all** the questions in this section.

1. (a) Define the term *environment*. (2 marks)
- (b) Name **two** divisions of physical Geography. (2 marks)
2. (a) Give **three** characteristics of comets. (3 marks)
- (b) State **three** proofs that show the shape of the earth is spherical. (3 marks)
3. (a) Give **two** types of igneous rocks. (2 marks)
- (b) Identify **three** uses of rocks. (3 marks)
4. The table below shows the rainfall and temperature data for town Y. Use it to answer (a).

Month	J	F	M	A	M	J	J	A	S	O	N	D
Temperature (°C)	21	21	20	18	15	14	13	13	15	16	18	20
Rainfall (mm)	24	25	30	74	17	143	131	126	70	55	31	27

- (a) (i) What is the mean annual range of temperature? (1 mark)
- (ii) Calculate the rainfall totals for town Y. (1 mark)
- (b) State **three** climatic conditions experienced in the hot deserts. (3 marks)
5. (a) Differentiate between ocean and sea. (2 marks)
- (b) The diagram below shows some coastal features. Name the features marked E, F and G. (3 marks)



SECTION B

Answer **question 6** and any other **two** questions from this section.

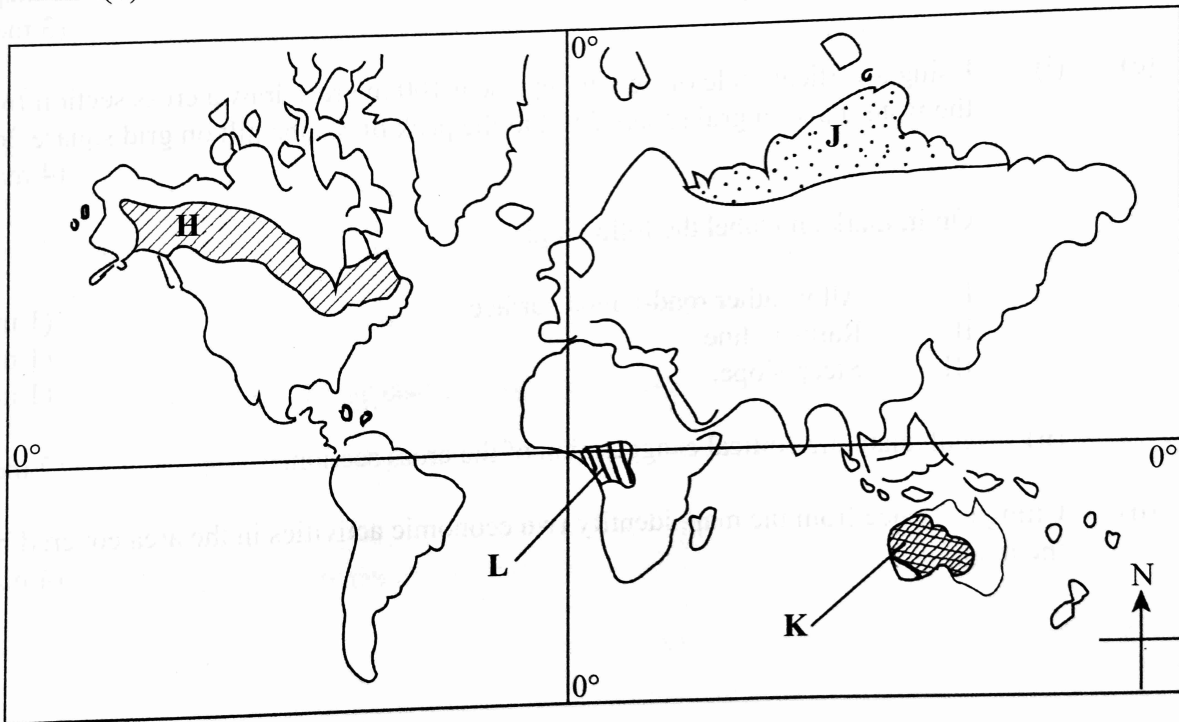
6. Study the map of Kijabe 1:50,000 (sheet 134/3) provided and answer the following questions.
- (a) (i) Convert the scale of the map extract into a statement scale. (2 marks)
- (ii) What is the bearing of the pump house at grid square 3893 from the trigonometrical station at Mweri? (2 marks)
- (iii) Calculate the area of the part of the forest to the east of easting 40 and south of northing 97. Give your answer in square kilometres. (2 marks)
- (b) (i) Apart from forest, give **three** types of natural vegetation found in the area covered by the map. (3 marks)
- (ii) Identify the **three** river drainage patterns found in the area covered by the map. (3 marks)
- (c) (i) Using a vertical scale of 1 cm to represent 100 metres, draw a cross section from the water tank on grid square 2592 to the peak of Kijabe hill on grid square 2699. (4 marks)
- On it, mark and label the following:
- I. All weather road-bound surface (1 mark)
- II. Railway line (1 mark)
- III. Steep slope. (1 mark)
- (ii) Calculate the vertical exaggeration of the cross section. (2 marks)
- (d) Citing evidence from the map, identify **two** economic activities in the area covered by the map. (4 marks)

(2 marks)

7. (a) (i) Define the term *vulcanicity*. (3 marks)
- (ii) Name the **three** stages in the life cycle of a volcano. (4 marks)
- (b) Describe how each of the following volcanic features are formed: (4 marks)
- (i) Lava plateau (4 marks)
- (ii) Geyser (4 marks)
- (iii) Caldera. (4 marks)
- (c) Explain **four** positive ways in which volcanic features influence human activities. (8 marks)

499

8. The map below shows some vegetation regions of the world. Use it to answer question a(i) and a(ii).



A002

- (a) (i) Name the vegetation marked **H**, **J** and **K**. (3 marks)
- (ii) Describe the characteristics of the vegetation found in the area shaded and marked **L**. (6 marks)
- (b) Explain how each of the following factors influence distribution of vegetation: (2 marks)
- (i) Rainfall (2 marks)
- (ii) Soils. (2 marks)



- (c) State **five** uses of Savanna vegetation. (5 marks)
- (d) You intend to carry out a field study on vegetation within the local environment.
 - (i) State **three** objectives you would formulate for the study. (3 marks)
 - (ii) Give **four** reasons why it is important to have a work schedule. (4 marks)

- 9.
- (a)
 - (i) Apart from biological weathering, list **two** other types of weathering. (2 marks)
 - (ii) Explain ways in which plants cause weathering of rocks. (6 marks)
 - (b) Explain how each of the following physical factors influence mass wasting:
 - (i) Earth movement (2 marks)
 - (ii) Nature of rock materials. (2 marks)
 - (c) Describe each of the following processes of mass wasting:
 - (i) Avalanche (2 marks)
 - (ii) Rock fall. (3 marks)
 - (d) Describe each of the following types of mass wasting:
 - (i) Earth flow (4 marks)
 - (ii) Slump. (4 marks)

- 10.
- (a)
 - (i) Give **three** features found in the upper stage of a river. (3 marks)
 - (ii) State **four** factors that favour the formation of braided channels. (4 marks)
 - (b) Explain the processes by which a river transports its load. (8 marks)
 - (c) With the aid of well labelled diagrams, describe how a river capture occurs. (7 marks)
 - (d) State **three** negative effects of rivers to human environment. (3 marks)

.....

.....


.....

.....

499

A002





499

A002

THIS IS THE LAST PRINTED PAGE.



Kenya Certificate of Secondary Education, 2020

312/1